



Measure the width of each block in inches and in centimeters.



Exin. 5 1/2

Excm. 13 - 14



1in. _____

1cm. _____



2in. _____

2cm. _____



3in. _____

3cm. _____



4in. _____

4cm. _____



5in. _____

5cm. _____



6in. _____

6cm. _____



7in. _____

7cm. _____



8in. _____

8cm. _____




9in. _____


9cm. _____


Answers





Measure the width of each block in inches and in centimeters.


Ex) 


1) 


2) 


3) 


4) 

5) 

6) 

7) 

8) 

9) 

Answers

Exin. 5 1/2

Excm. 13 - 14

1in. 3 1/2

1cm. 8 - 9

2in. 4

2cm. 10 - 11

3in. 5

3cm. 12 - 13

4in. 1

4cm. 2 - 3

5in. 3

5cm. 7 - 8

6in. 0 1/2

6cm. 1 - 2

7in. 1 1/2

7cm. 3 - 4

8in. 2

8cm. 5 - 6

9in. 4 1/2

9cm. 11 - 12